

Elapsed time within an hour

MODULE 5 · TIME AND MONEY NUMBER

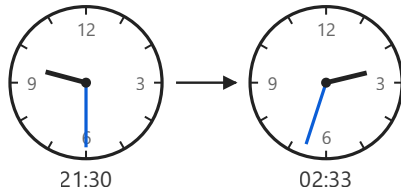
HOW TO ANSWER TODAY

- **Elapsed time.** Count up to the next hour, then in whole hours, then the remaining minutes. Add the parts.

14:30 → 16:45: 30 min to 15:00, 1 h to 16:00, 45 min to 16:45 → 2 h 15 min

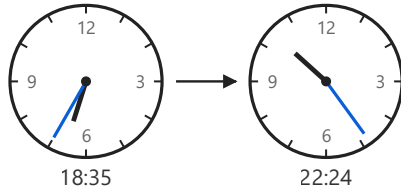
STRETCH PROBLEMS

1



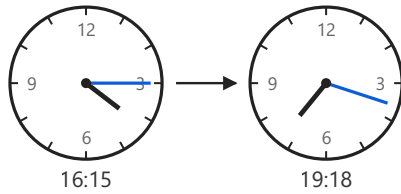
On Christmas Eve, Tadhg's cousins start a board game at **21:30** and play right through until **02:33** on Christmas morning. How much time passes while they are playing?

2



Cian's family go to the cinema in Galway on Saturday evening. The film starts at **18:35** and finishes at **22:24**. How long does the film last?

3



On Christmas Eve, Tadhg's cousins arrive at the house at **16:15** and stay chatting until **19:18**, when the dinner is finally served. How much time passes between the cousins arriving and the Christmas dinner being served?