

Elapsed time within an hour

MODULE 5 · TIME AND MONEY NUMBER

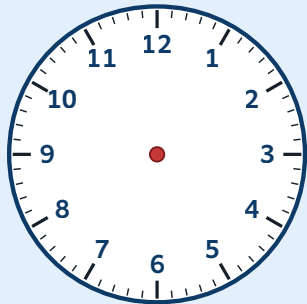
HOW TO ANSWER TODAY

- **Elapsed time.** Count up to the next hour, then in whole hours, then the remaining minutes. Add the parts.

14:30 → 16:45: 30 min to 15:00, 1 h to 16:00, 45 min to 16:45 → 2 h 15 min

TRY IT ON THE LINE

Use the clock face to count minutes from the START time to the END time. Count in fives around the dial.

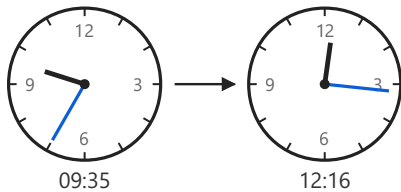


1. Start: **2:10**, End: **2:35**. Elapsed = ____ minutes.
2. Start: **9:05**, End: **9:50**. Elapsed = ____ minutes.
3. Start: **11:25**, End: **11:55**. Elapsed = ____ minutes.
4. Stretch: Start: **3:48**, End: **4:00** (counts to the next o'clock). Elapsed = ____ minutes.

times and count minutes betw

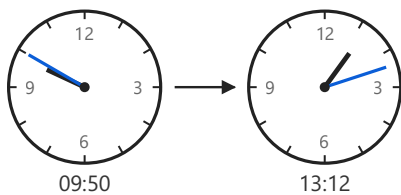
PRACTICE

1



The morning bell rings at **09:35** for 5th class to start their first lesson. They keep working through the morning until the lunch bell rings at **12:16**. How much time passes between the two bells?

2



5th class set off from the school yard for their tour to the Cliffs of Moher at **09:50**. The coach pulls into the Cliffs car park at **13:12**. How long does the journey take?

SPOT THE MISTAKE

Cian works out the time from 11:48 to 12:30 like this:

He looks only at the minutes:
 $30 - 48 = -18$
 So 18 minutes.

Cian's answer is wrong. What did he forget? What's the correct answer?